

Part A

1. In 1998, the population of Canada was 30.3 million. Which number is the same as 30.3 million?
 (A) 30 300 000 (B) 303 000 000 (C) 30 300 (D) 303 000 (E) 30 300 000 000

Solution

In order to find what number best represents 30.3 million, it is necessary to multiply 30.3 by 1 000 000. This gives the number 30 300 000. ANSWER: (A)

2. What number should be placed in the box to make $\frac{6+\square}{20} = \frac{1}{2}$?
 (A) 10 (B) 4 (C) -5 (D) 34 (E) 14

Solution

Expressing $\frac{1}{2}$ as a fraction with denominator 20, we get $\frac{10}{20}$.

So $\frac{6+\square}{20} = \frac{10}{20}$. Comparing the numerators, $6+\square=10$, so the number to place in the box is 4.

ANSWER: (B)

3. The value of $3 \times 4^2 - (8 \div 2)$ is
 (A) 44 (B) 12 (C) 20 (D) 8 (E) 140

Solution

Evaluating, $3 \times 4^2 - (8 \div 2)$
 $= 48 - 4$
 $= 44.$

ANSWER: (A)

4. When a number is divided by 7, the quotient is 12 and the remainder is 5. The number is
 (A) 47 (B) 79 (C) 67 (D) 119 (E) 89

Solution

Since the quotient is 12 and the remainder is 5, then the number is $(7 \times 12) + 5 = 89$.

ANSWER: (E)

5. If $2x - 5 = 15$, the value of x is
 (A) 5 (B) -5 (C) 10 (D) 0 (E) -10

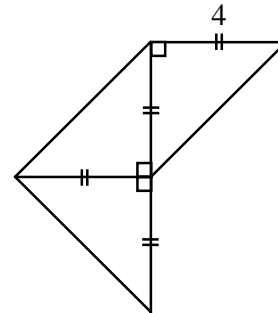
Solution

Since $2x - 5 = 15$, then $2x - 5 + 5 = 15 + 5$

$$\begin{aligned} 2x &= 20 \\ \frac{2x}{2} &= \frac{20}{2} \\ x &= 10. \end{aligned}$$

ANSWER: (C)

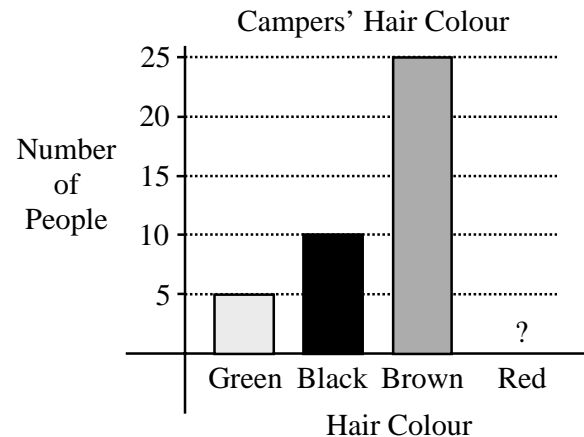
6. The area of the entire figure shown is
 (A) 16 (B) 32 (C) 20
 (D) 24 (E) 64



Solution

Each of the three small triangles is an isosceles right angled triangle having a side length of 4. The area of each small triangle is thus $\frac{1}{2}(4)(4) = 8$. The total area is 3×8 or 24. ANSWER: (D)

7. The bar graph shows the hair colours of the campers at Camp Gauss. The bar corresponding to redheads has been accidentally removed. If 50% of the campers have brown hair, how many of the campers have red hair?
 (A) 5 (B) 10 (C) 25
 (D) 50 (E) 60



Solution

From the graph, we can see that there are 25 campers with brown hair. We are told that this represents 50% of the total number of campers. So in total there are then 2×25 or 50 campers. There is a total of 15 campers who have either green or black hair. This means that $50 - (25 + 15)$ or 10 campers have red hair. ANSWER: (B)

8. A fair die is constructed by labelling the faces of a wooden cube with the numbers 1, 1, 1, 2, 3, and 3. If this die is rolled once, the probability of rolling an odd number is
 (A) $\frac{5}{6}$ (B) $\frac{4}{6}$ (C) $\frac{3}{6}$ (D) $\frac{2}{6}$ (E) $\frac{1}{6}$

Solution

There are six different equally likely possibilities in rolling the die. Since five of these are odd numbers, the probability of rolling an odd number is five out of six or $\frac{5}{6}$. ANSWER: (A)

9. In the square shown, the numbers in each row, column, and diagonal multiply to give the same result. The sum of the two missing numbers is
- (A) 28 (B) 15 (C) 30
 (D) 38 (E) 72

12	1	18
9	6	4
		3

Solution

The numbers in each row, column and diagonal multiply to give a product of $(12)(1)(18)$ or 216. We are now looking for two numbers such that $(12)(9)(\quad) = 216$ and $(1)(6)(\quad) = 216$. The required numbers are 2 and 36 which have a sum of 38. ANSWER: (D)

10. Rowena is able to mow $\frac{2}{5}$ of a lawn in 18 minutes. If she began the job at 10:00 a.m., and mowed at this same constant rate, when did she finish mowing the entire lawn?
- (A) 10:08 a.m. (B) 11:30 a.m. (C) 10:40 a.m. (D) 10:25 a.m. (E) 10:45 a.m.

Solution

Since Rowena can mow $\frac{2}{5}$ of the lawn in 18 minutes, she can mow $\frac{1}{5}$ of the lawn in 9 minutes. This tells us that it takes her $5 \times 9 = 45$ minutes to mow the whole lawn. So if she starts at 10:00 a.m., she finishes at 10:45 a.m. ANSWER: (E)

Part B

11. In a class of 25 students, each student has at most one pet. Three-fifths of the students have cats, 20% have dogs, three have elephants, and the other students have no pets. How many students have no pets?
- (A) 5 (B) 4 (C) 3 (D) 2 (E) 1

Solution

Three-fifths of 25 is $\frac{3}{5} \times 25 = 15$, so 15 students have cats. Twenty percent of 25 is $\frac{20}{100} \times 25 = \frac{1}{5} \times 25 = 5$, so 5 students have dogs. This tells us that $15 + 5 + 3 = 23$ students have pets. So there are 2 students without pets. ANSWER: (D)

12. A prime number is called a “Superprime” if doubling it, and then subtracting 1, results in another prime number. The number of Superprimes less than 15 is
- (A) 2 (B) 3 (C) 4 (D) 5 (E) 6

Solution

The only possible candidates for ‘Superprimes’ are 2, 3, 5, 7, 11 and 13 since they are the only prime numbers less than 15. If we double each of these numbers and then subtract 1 we get 3, 5, 9, 13, 21 and 25. Three of these results are prime numbers. So there are only three Superprimes. ANSWER: (B)

13. Laura earns \$10/hour and works 8 hours per day for 10 days. She first spends 25% of her pay on food and clothing, and then pays \$350 in rent. How much of her pay does she have left?
 (A) \$275 (B) \$200 (C) \$350 (D) \$250 (E) \$300

Solution

In 10 days, Laura works $8 \times 10 = 80$ hours. So in these 10 days, she earns $80 \times \$10 = \800 . Since $25\% = \frac{1}{4}$, she spends $\frac{1}{4} \times \$800 = \200 on food and clothing, leaving her with \$600.

If she spends \$350 on rent, she will then have $\$600 - \350 or \$250 left. ANSWER: (D)

14. A rectangular sign that has dimensions 9 m by 16 m has a square advertisement painted on it. The border around the square is required to be at least 1.5 m wide. The area of the largest square advertisement that can be painted on the sign is
 (A) 78 m^2 (B) 144 m^2 (C) 36 m^2 (D) 9 m^2 (E) 56.25 m^2

Solution

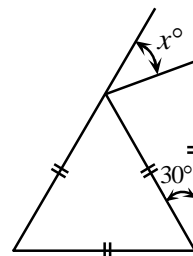
If the 9×16 rectangle has a square painted on it such that the square must have a border of width 1.5 m this means that the square has a maximum width of $9 - 1.5 - 1.5 = 6$. So the largest square has an area of $6 \text{ m} \times 6 \text{ m}$ or 36 m^2 . ANSWER: (C)

15. The surface area of a cube is 24 cm^2 . The volume of this cube is
 (A) 4 cm^3 (B) 24 cm^3 (C) 8 cm^3 (D) 27 cm^3 (E) 64 cm^3

Solution

A cube has six square faces of equal area, so each of these faces has area $\frac{1}{6} \times 24 \text{ cm}^2 = 4 \text{ cm}^2$. This tells us that the side length of the cube must be 2 cm. The volume of the cube is $2 \text{ cm} \times 2 \text{ cm} \times 2 \text{ cm} = 8 \text{ cm}^3$. ANSWER: (C)

16. In the diagram, the value of x is
 (A) 30 (B) 40 (C) 60
 (D) 50 (E) 45

*Solution*

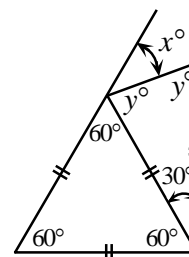
All angles in an equilateral triangle are 60° .

The triangle next to the equilateral triangle is isosceles, so let each of the remaining angles be y° .

The angles in a triangle add to 180° , so $y^\circ + y^\circ + 30^\circ = 180^\circ$

$$2y^\circ + 30^\circ = 180^\circ$$

$$y^\circ = 75^\circ.$$



The angles in a straight line add to 180° , so

$$x^\circ + y^\circ + 60^\circ = 180^\circ, y^\circ = 75^\circ$$

$$x^\circ + 75^\circ + 60^\circ = 180^\circ$$

$$x^\circ = 45^\circ$$

ANSWER: (E)

17. Daniel's age is one-ninth of his father's age. One year from now, Daniel's father's age will be seven times Daniel's age. The difference between their ages is
 (A) 24 (B) 25 (C) 26 (D) 27 (E) 28

Solution

Let Daniel's age be d . Then Daniel's father's age is $9d$.

In one year, Daniel's age will be $d+1$ and Daniel's father's will be $9d+1$.

So $9d+1 = 7(d+1)$

$$9d+1 = 7d+7$$

$$2d = 6$$

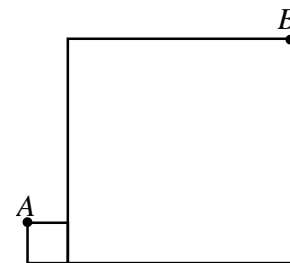
$$d = 3.$$

Therefore, now Daniel's age is 3 and Daniel's father's age is 27, so the difference between their ages is 24.

ANSWER: (A)

18. Two squares are positioned, as shown. The smaller square has side length 1 and the larger square has side length 7. The length of AB is

- (A) 14 (B) $\sqrt{113}$ (C) 10
 (D) $\sqrt{85}$ (E) $\sqrt{72}$



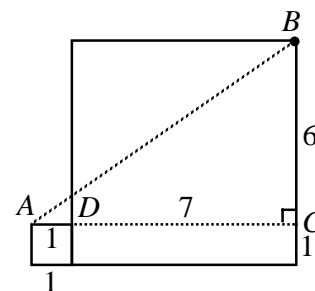
Solution

From A , along the side of the small square, we extend side AD so that it meets the big square at C as shown.

The length of AC is the sum of the side lengths of the squares, i.e. $7+1=8$.

The length of BC is the difference of the side lengths so $BC = 6$.

By Pythagoras, $AB^2 = 8^2 + 6^2 = 100$, $AB = 10$.



ANSWER: (C)

19. Anne, Beth and Chris have 10 candies to divide amongst themselves. Anne gets at least 3 candies, while Beth and Chris each get at least 2. If Chris gets at most 3, the number of candies that Beth could get is
 (A) 2 (B) 2 or 3 (C) 3 or 4 (D) 2, 3 or 5 (E) 2, 3, 4 or 5

Solution

If Anne gets at least 3 candies and Chris gets either 2 or 3 this implies that Beth could get as many as 5 candies if Chris gets only 2. If Chris and Anne increase their number of candies this means that Beth could get any number of candies ranging from 2 to 5.

ANSWER: (E)

20. What number should be placed in the box to make $10^4 \times 100^\square = 1000^6$?

(A) 7 (B) 5 (C) 2 (D) $\frac{3}{2}$ (E) 10

Solution

Since 1000 has 3 zeros, 1000^6 has 18 zeros, so the left side should have 18 zeros too. The number 10^4 has 4 zeros, so that leaves 14 zeros for the number 100^\square . Since 100 has 2 zeros, the number in the box should be 7.

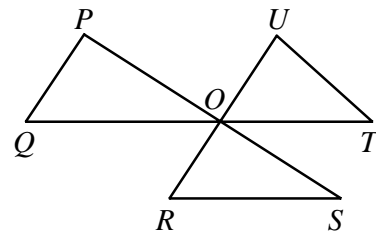
ANSWER: (A)

Part C

21. Lines PS , QT and RU intersect at a common point O , as shown. P is joined to Q , R to S , and T to U , to form triangles.

The value of $\angle P + \angle Q + \angle R + \angle S + \angle T + \angle U$ is

(A) 450° (B) 270° (C) 360°
 (D) 540° (E) 720°

*Solution*

We know that $\angle POQ + \angle POU + \angle UOT = 180^\circ$ because when added they form a straight line. Since $\angle POU = \angle ROS$ (vertically opposite angles), therefore $\angle POQ + \angle ROS + \angle UOT = 180^\circ$.

Thus the sum of the remaining angles is just $3 \times 180^\circ - 180^\circ = 360^\circ$ since there are 180° in each of the three given triangles.

ANSWER: (C)

22. Sixty-four white $1 \times 1 \times 1$ cubes are used to form a $4 \times 4 \times 4$ cube, which is then painted red on each of its six faces. This large cube is then broken up into its 64 unit cubes. Each unit cube is given a score as follows:

<u>Exact number of faces painted red</u>	<u>Score</u>
3	3
2	2
1	1
0	-7

The total score for the $4 \times 4 \times 4$ cube is

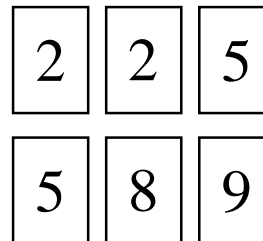
(A) 40 (B) 41 (C) 42 (D) 43 (E) 44

Solution

First, we deal with the positive points. There is one point assigned for each red face. On each face of the large cube, there will be 16 red faces of $1 \times 1 \times 1$ cubes. This gives $6 \times 16 = 96$ red faces on $1 \times 1 \times 1$ cubes in total. So there are 96 positive points. However, there will be $2 \times 2 \times 2 = 8$ unit cubes which have no paint, and these will account for $8 \times (-7) = -56$ points.

Then the point total for the cube is $96 + (-56) = 40$. (Notice that it was not necessary that we consider cubes with paint on either 3 sides or 2 sides if we use this method.) ANSWER: (A)

23. The integers 2, 2, 5, 5, 8, and 9 are written on six cards, as shown. Any number of the six cards is chosen, and the sum of the integers on these cards is determined. Note that the integers 1 and 30 cannot be obtained as sums in this way. How many of the integers from 1 to 31 cannot be obtained as sums?



- (A) 4 (B) 22 (C) 8
(D) 10 (E) 6

Solution

First, we observe that the sum of the digits on all 6 cards is 31.

Next, we see that if we cannot get a sum of S , then we cannot get a sum of $31 - S$. This is an important point. If we could get $31 - S$, then we could take the cards not used and their digits would add to S . Simply stated, our inability to get S means that we would be unable to get $31 - S$.

So we need to check which sums from 1 to 15 cannot be obtained, and then double this total number. Checking possibilities, we see that we can get 2, 4, 5, 7, 8, 9, 10, 11, 12, 13, 14, 15 but cannot get 1, 3, 6. From above, we thus cannot get $31 - 1 = 30$, $31 - 3 = 28$ or $31 - 6 = 25$.

So there are 6 sums that cannot be obtained.

ANSWER: (E)

24. A triangle can be formed having side lengths 4, 5 and 8. It is impossible, however, to construct a triangle with side lengths 4, 5 and 9. Ron has eight sticks, each having an integer length. He observes that he cannot form a triangle using any three of these sticks as side lengths. The shortest possible length of the longest of the eight sticks is
- (A) 20 (B) 21 (C) 22 (D) 23 (E) 24

Solution

If Ron wants the three smallest possible lengths with which he cannot form a triangle, he should start with the lengths 1, 1 and 2. (These are the first three Fibonacci numbers). If he forms a sequence by adding the last two numbers in the sequence to form the next term, he would generate the sequence: 1, 1, 2, 3, 5, 8, 13, 21. Notice that if we take any three lengths in this sequence, we can never form a triangle. The shortest possible length of the longest stick is 21.

ANSWER: (B)

25. Tony and Maria are training for a race by running all the way up and down a 700 m long ski slope. They each run up the slope at different constant speeds. Coming down the slope, each runs at double his or her uphill speed. Maria reaches the top first, and immediately starts running back down, meeting Tony 70 m from the top. When Maria reaches the bottom, how far behind is Tony?
- (A) 140 m (B) 250 m (C) 280 m (D) 300 m (E) 320 m

Solution

When Tony and Maria meet for the first time, Tony has run $700 - 70 = 630$ m.

At this point, Maria has run 700 m up the hill and then 70 m at double the speed back down the hill. This takes her the same amount of time as if she had run 700 m up the hill and then 35 m more at the same speed.

In effect, she has run 735 m, while Tony has run 630 m. So the ratio of their speeds is $\frac{735}{630} = \frac{7(105)}{6(105)} = \frac{7}{6}$.

This means that for every 6 metres that Tony covers, Maria will cover 7 metres.

If we think of both runners as running at constant speeds, Maria runs $700 + \frac{1}{2}(700) = 1050$ m at a constant speed over the course of the race. In effect, we are saying that she would run the equivalent of 1050 m at the same constant speed at which she ran up the hill.

She runs $\frac{7}{6}$ as fast as Tony. In the time that Maria runs 1050 m, Tony runs $\frac{6}{7} \times 1050 \text{ m} = 900$ m at a constant speed.

So in this new way of looking at the race, Tony is 150 m behind Maria.

But this 150 m is in the new way of looking at things, so Tony is actually $2 \times 150 \text{ m} = 300$ m behind Maria.

ANSWER: (D)

