

Getting Started

In geometry, there are certain terms that we just understand. For example, if you were asked to define an angle, you might struggle with appropriate words but could easily draw an angle. Try writing a definition below:

Let us discuss a short list of definitions that will be useful in our discussions.

Angle Related Definitions

1. A/an _____
is any angle measuring between 0° and 90° .

2. A/an _____
is an angle measuring 90° .

3. A/an _____
is any angle measuring between 90° and 180° .

4. A/an _____
is an angle measuring 180° .

5. Two angles whose sum is 180° are called
_____.

6. Two angles whose sum is 90° are called
_____.

7. A/an _____
triangle has three sides of different length.

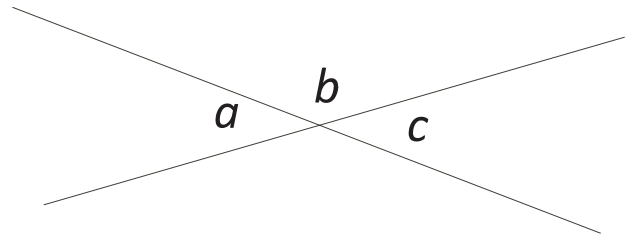
8. A/an _____
triangle has two sides of equal length.

9. A/an _____
triangle has three sides of equal length.

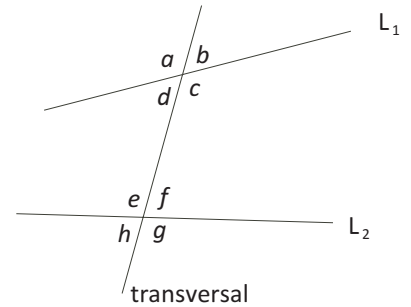
10. When two lines intersect, four angles are formed. The angles that are directly opposite to each other are called
_____.

Prove: Opposite angles are equal.

Proof:



11. A/an _____ is any line that intersects two (or more) lines at different points.



12. Two angles located on the same side of the transversal between the two lines are called _____.

13. Two non-adjacent angles located on opposite sides of the transversal between the two lines are called _____.

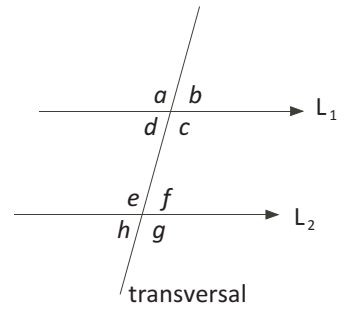
14. Two non-adjacent angles located on opposite sides of the transversal but not between the two lines are called _____.

15. Two angles located at the same location relative to where the transversal intersects each line are called _____.

16. A/an _____ is a logical statement which is assumed to be true. We just accept the truth of the statement.

Axiom:

If a transversal cuts two parallel lines, then the co-interior angles are supplementary. That is, the two co-interior angles add to 180° .

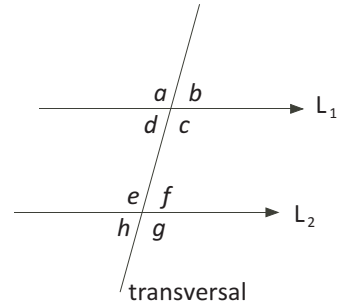


Another axiom that we could have started with is: “the angles in a triangle sum to 180° .” As a result of starting with the first axiom, we will be able to prove the second axiom (it will not be an axiom for us).

Prove:

If a transversal cuts two parallel lines, then the alternate angles are equal and the corresponding angles are equal.

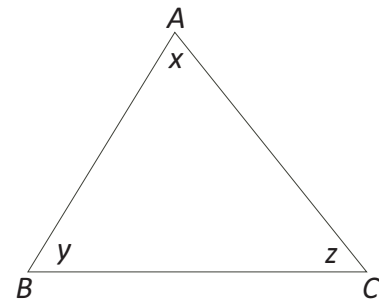
Proof:



Prove:

In any triangle, the sum of the interior angles is 180° .

Proof:



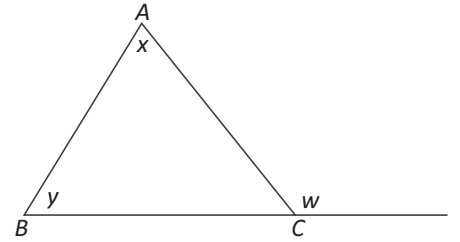
Definition:

A/an _____ is the angle between one side of a triangle and the extension of an adjacent side.

Prove:

An exterior angle of a triangle is equal to the sum of the opposite interior angles.

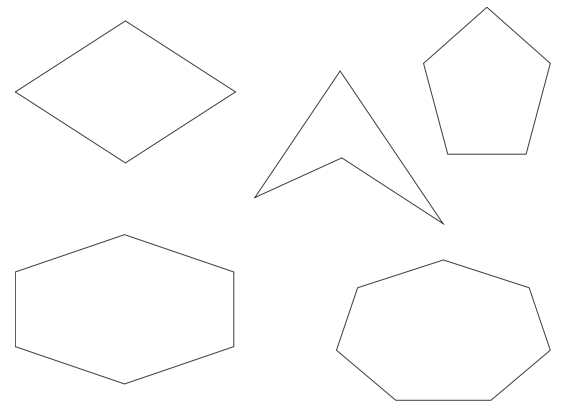
Proof:



Definition:

A _____ is a closed plane figure having three or more sides. Triangles, rectangles, and octagons are all examples of polygons.

A _____ polygon is a polygon in which all sides are the same length and all interior angles are the same measure.



- a) Determine the sum of the interior angles in a quadrilateral.

- b) Determine the sum of the interior angles in a pentagon.

- c) Determine the sum of the interior angles in a hexagon.

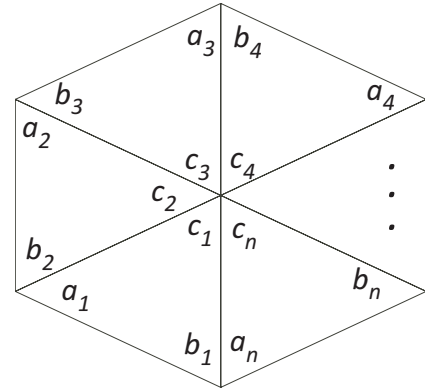
- d) Determine the sum of the interior angles in a heptagon.

Based on this pattern, what would be your conjecture for a formula for the sum of the interior angles in an n -gon?

Prove:

The sum of the interior angles in an n -sided polygon is $180^\circ \times (n - 2)$.

Proof:

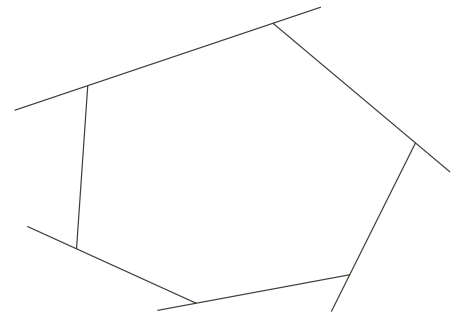


Since each angle in a regular polygon is equal, then it follows that each angle in a regular n -sided polygon is _____.

Prove:

The sum of the exterior angles in an n -sided polygon is 360° .

Proof:



Prove:

If a triangle is isosceles, then the angles opposite the equal sides are equal.

Proof:

